











Name: \_\_\_\_\_



Class: \_\_\_\_\_



# Secret Code Addition



Hi, secret agent! Let's crack the secret code to solve the math problems. Use the chart below to rewrite the problems using numbers.







									
0	1	2	3	4	5	6	7	8	9



	+		=	_____
1	+	3	=	4



	+		=	_____
_____	+	_____	=	_____



	+		=	_____
_____	+	_____	=	_____



	+		=	_____
_____	+	_____	=	_____

	+		=	_____
_____	+	_____	=	_____

	+		=	_____
_____	+	_____	=	_____

	+		=	_____
_____	+	_____	=	_____

	+		=	_____
_____	+	_____	=	_____

	+		=	_____
_____	+	_____	=	_____